

Name: _____

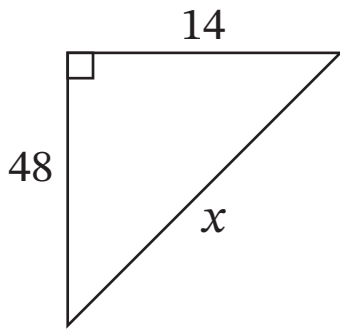
Score: ____ /10

Date: _____

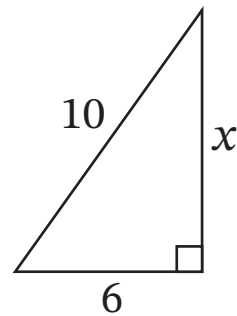
Pythagorean Theorem - Basic

Solve for x

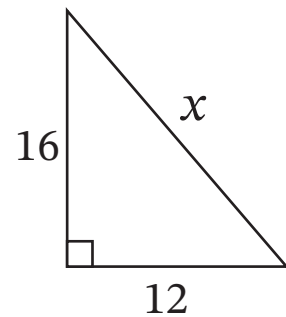
#1



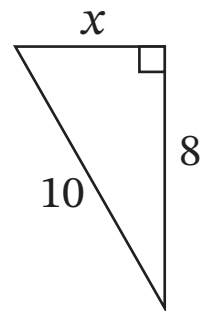
#2



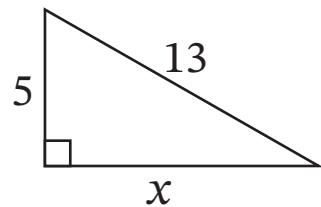
#3



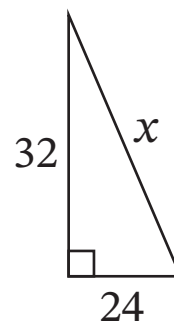
#4



#5



#6



7. $a = \underline{\hspace{2cm}}$; $b = 35$; $c = 37$

8. $a = 7$; $b = \underline{\hspace{2cm}}$; $c = 25$

9. $a = 12$; $b = 16$; $c = \underline{\hspace{2cm}}$

10. $a = \underline{\hspace{2cm}}$; $b = 24$; $c = 26$

Name: _____

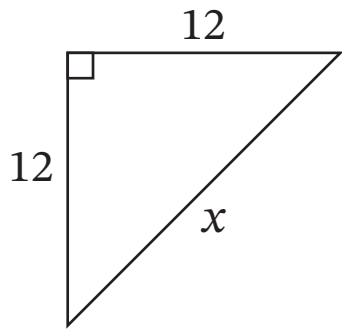
Score: ___ /10

Date: _____

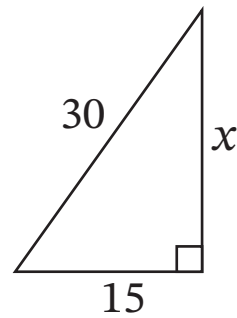
Pythagorean Theorem - Advanced

Solve for x

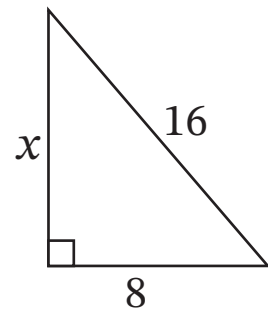
#1



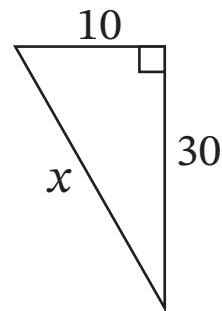
#2



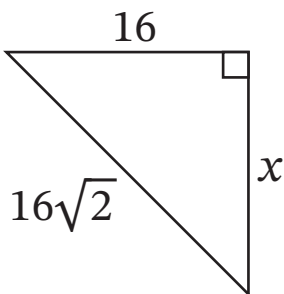
#3



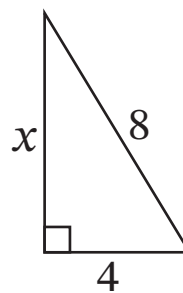
#4



#5



#6



7. $a = 13$; $b = \underline{\hspace{2cm}}$; $c = 13\sqrt{2}$

8. $a = 7$; $b = \underline{\hspace{2cm}}$; $c = 14$

9. $a = 6$; $b = 8$; $c = \underline{\hspace{2cm}}$

10. $a = \underline{\hspace{2cm}}$; $b = 8\sqrt{3}$; $c = 16$